

Counting in 10s

10		30		50		70		90	
----	--	----	--	----	--	----	--	----	--

0		20		40		60		80	
---	--	----	--	----	--	----	--	----	--

40		60		80		100
----	--	----	--	----	--	-----

90		70		50		30		10	
----	--	----	--	----	--	----	--	----	--

60	70	80					
----	----	----	--	--	--	--	--

30	40	50					
----	----	----	--	--	--	--	--

100	90	80							
-----	----	----	--	--	--	--	--	--	--

0	10	20							
---	----	----	--	--	--	--	--	--	--

		30			60			90	
--	--	----	--	--	----	--	--	----	--

			50		70			
--	--	--	----	--	----	--	--	--



Counting in 5s

5		15		25		35		45	
---	--	----	--	----	--	----	--	----	--

0		10		20		30		40	
---	--	----	--	----	--	----	--	----	--

		40		30		20		10	
--	--	----	--	----	--	----	--	----	--

5		15		25		35		45	
---	--	----	--	----	--	----	--	----	--

90		80		70		60		50	
----	--	----	--	----	--	----	--	----	--

35		45		55		65		75	
----	--	----	--	----	--	----	--	----	--

100		90		80		70		60	
-----	--	----	--	----	--	----	--	----	--

	75		65		55		45		
--	----	--	----	--	----	--	----	--	--

		30			45			60	
--	--	----	--	--	----	--	--	----	--

75	80	85	90						
----	----	----	----	--	--	--	--	--	--



Counting in 2s

0		4		8		12		16	
---	--	---	--	---	--	----	--	----	--

8		12		16		20		24	
---	--	----	--	----	--	----	--	----	--

	40		44		48		52		56
--	----	--	----	--	----	--	----	--	----

		52			58			64	
--	--	----	--	--	----	--	--	----	--

		15		19		23		27	
--	--	----	--	----	--	----	--	----	--

6	8	10							
---	---	----	--	--	--	--	--	--	--


44	46	48							
----	----	----	--	--	--	--	--	--	--

100	98	96							
-----	----	----	--	--	--	--	--	--	--

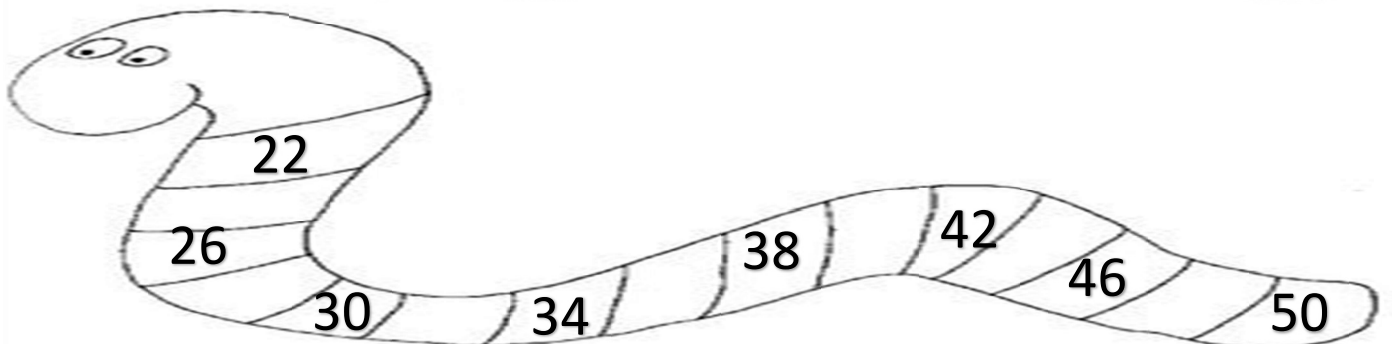
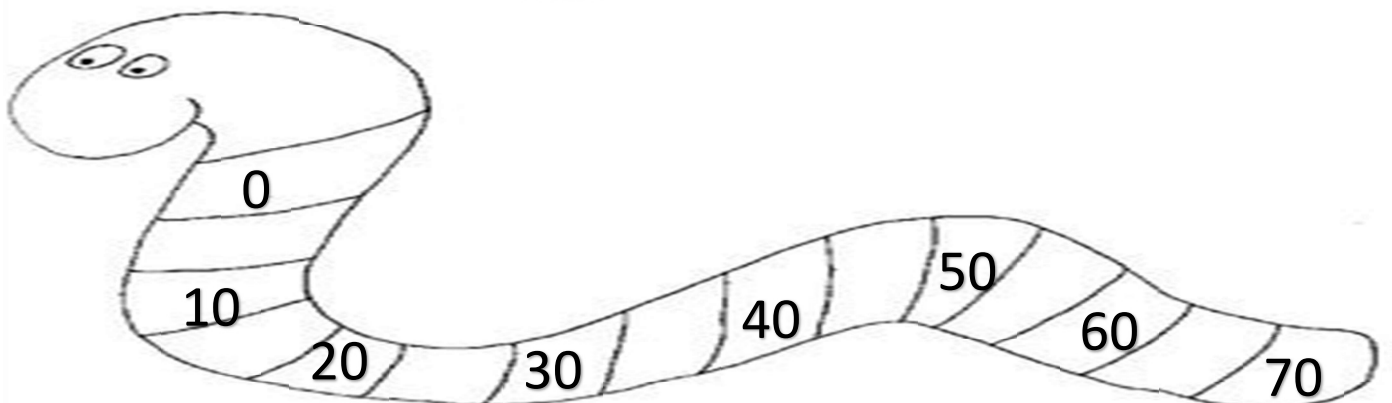
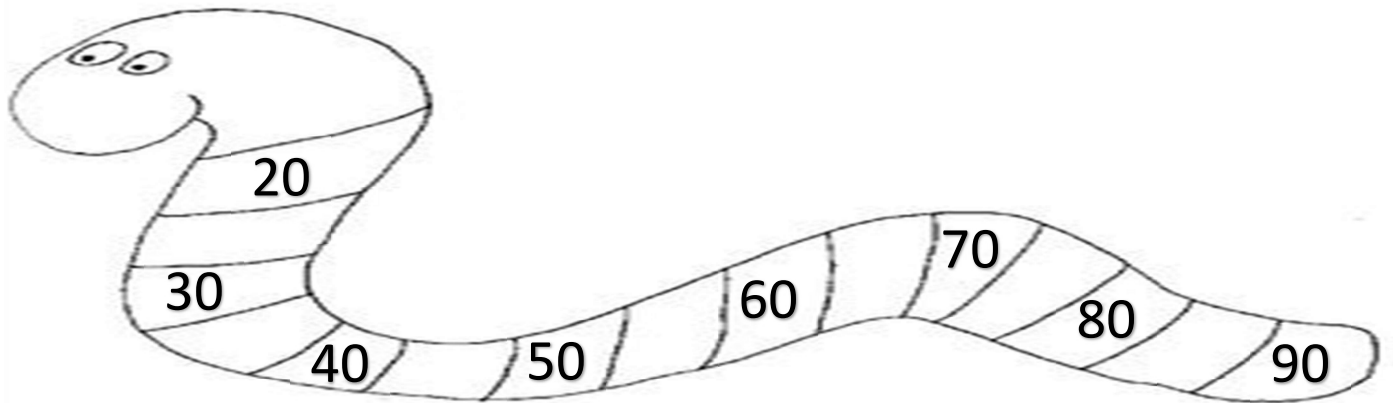
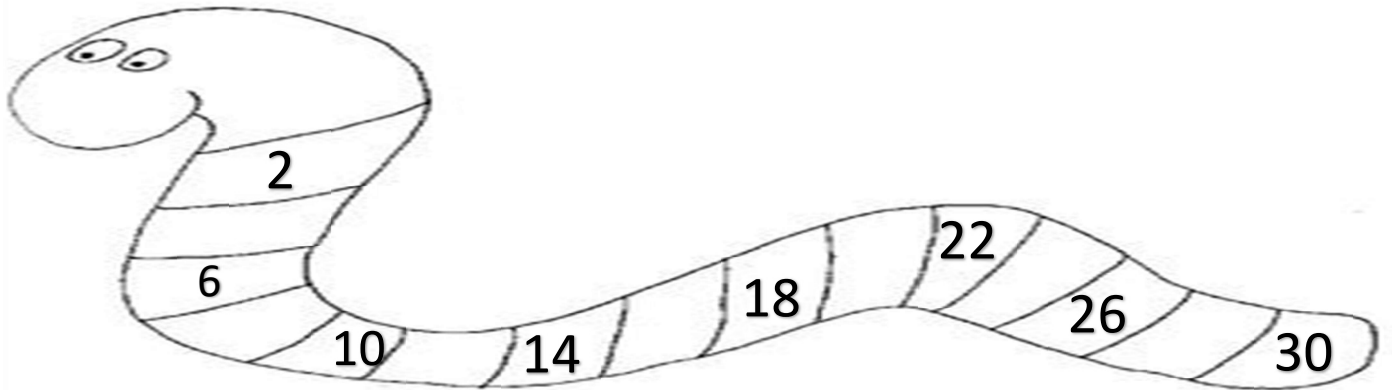
22	20	18							
----	----	----	--	--	--	--	--	--	--

0	2	4							
---	---	---	--	--	--	--	--	--	--

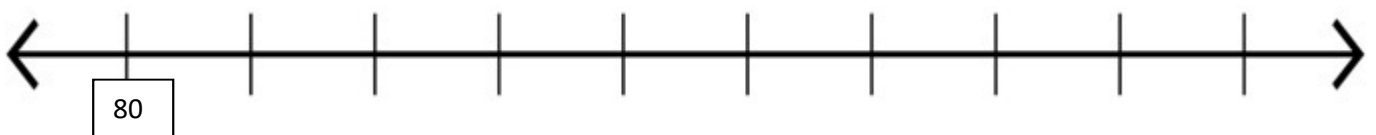
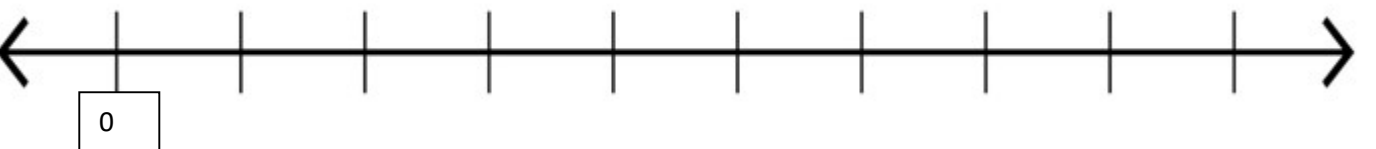
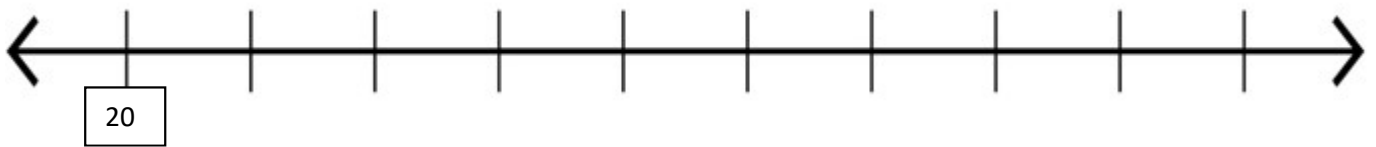
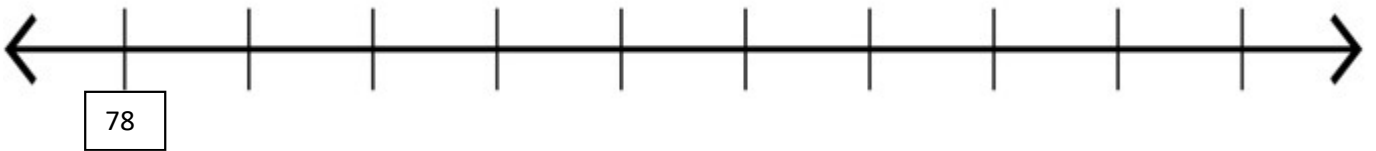
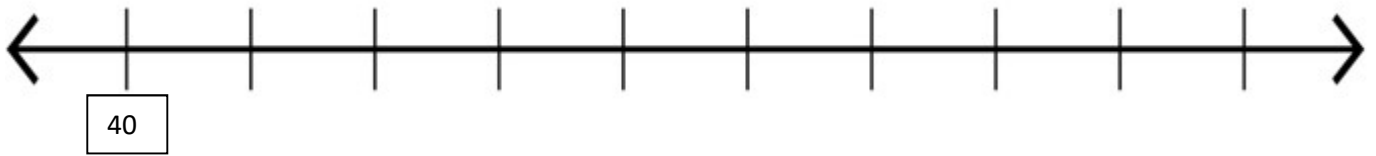
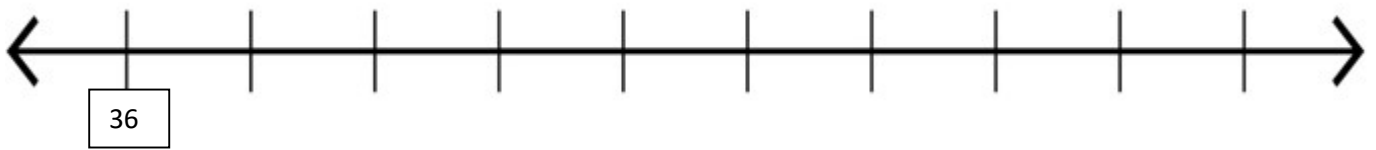
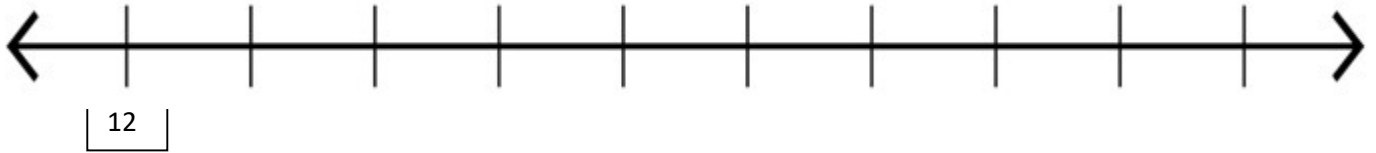
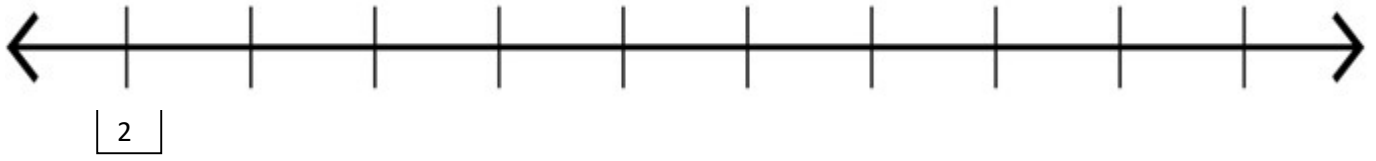




Fill the missing numbers on the snake



Count in steps of 2s from given number:



Counting in steps


How many crayons altogether?




How many hands altogether?



How many legs these penguins have altogether?



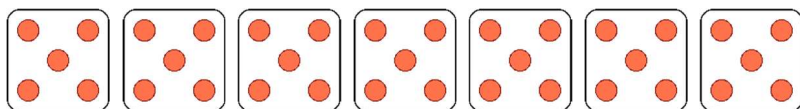
How many cards of 10 altogether



How many pair of shoes altogether?



How many dots altogether?




How many coins altogether?



How many coins altogether?



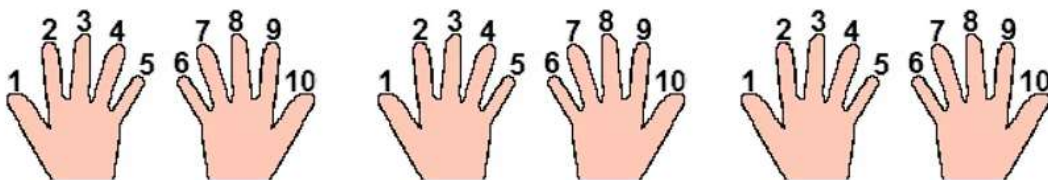
How many DVDs altogether?



How many pair of socks altogether?



How many fingers altogether?



How much candies altogether?

