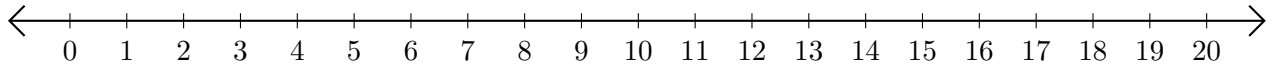


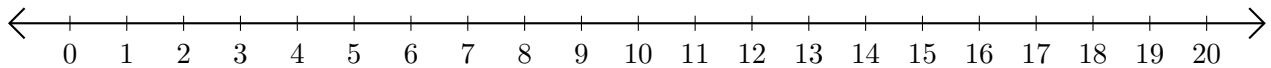
# Subtracting on Number Lines (A)

Use the number lines to calculate each difference.

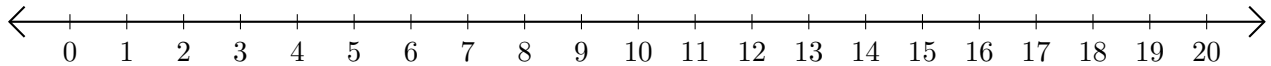
1.  $19 - 6 = \underline{\quad}$



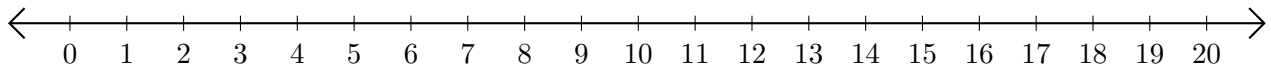
2.  $18 - 4 = \underline{\quad}$



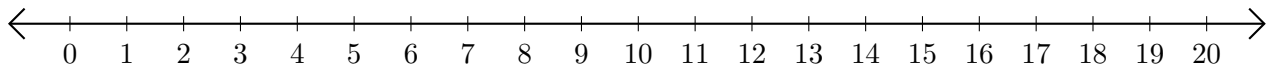
3.  $20 - 19 = \underline{\quad}$



4.  $19 - 18 = \underline{\quad}$



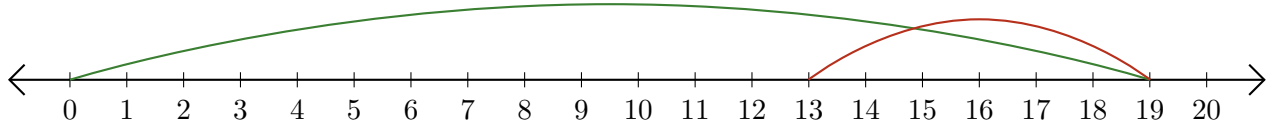
5.  $14 - 9 = \underline{\quad}$



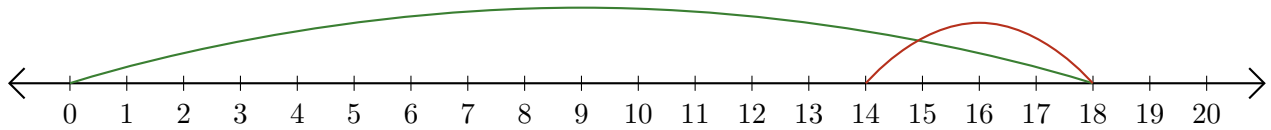
# Subtracting on Number Lines (A) Answers

Use the number lines to calculate each difference.

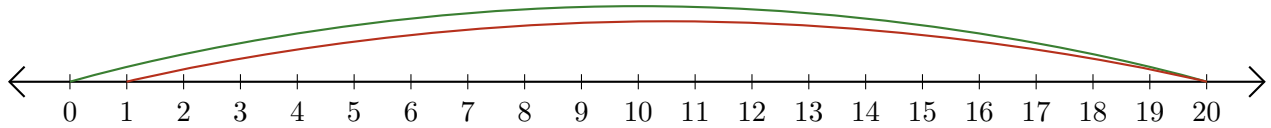
1.  $19 - 6 = \underline{13}$



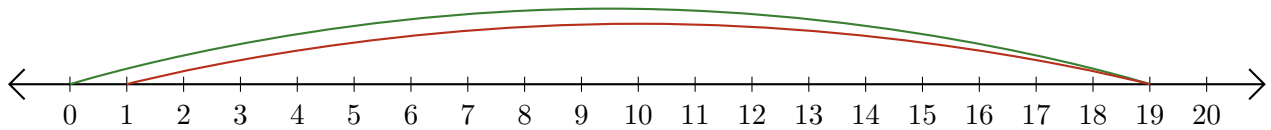
2.  $18 - 4 = \underline{14}$



3.  $20 - 19 = \underline{1}$



4.  $19 - 18 = \underline{1}$



5.  $14 - 9 = \underline{5}$

